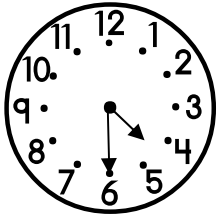
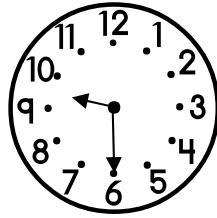


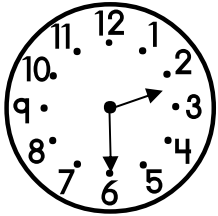
Look at each clock and write the time.



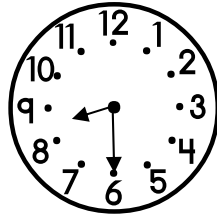
4:30



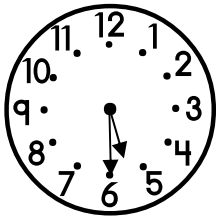
\_\_\_\_ : \_\_\_\_



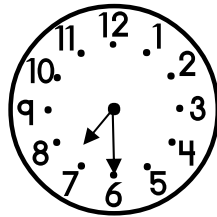
\_\_\_\_ : \_\_\_\_



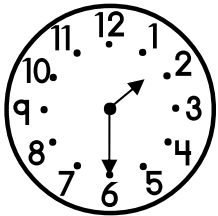
\_\_\_\_ : \_\_\_\_



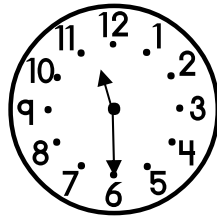
\_\_\_\_ : \_\_\_\_



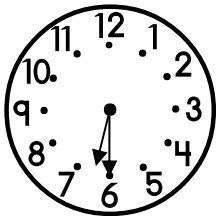
\_\_\_\_ : \_\_\_\_



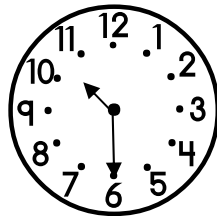
\_\_\_\_ : \_\_\_\_



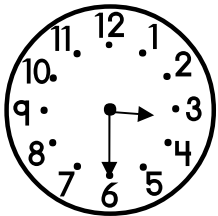
\_\_\_\_ : \_\_\_\_



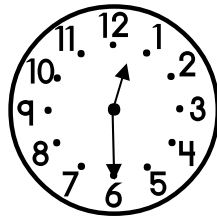
\_\_\_\_ : \_\_\_\_



\_\_\_\_ : \_\_\_\_

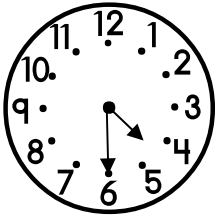


\_\_\_\_ : \_\_\_\_

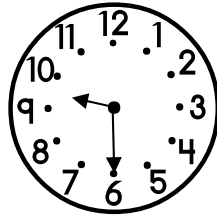


\_\_\_\_ : \_\_\_\_

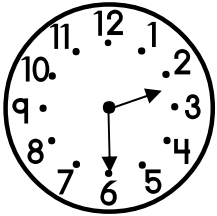
Look at each clock and write the time.



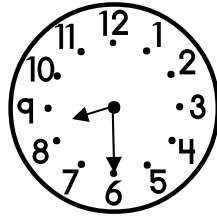
4:30



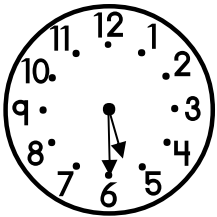
9:30



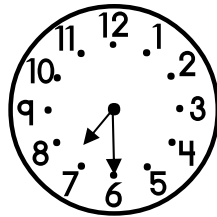
2:30



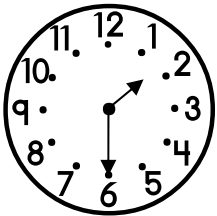
8:30



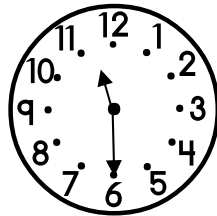
5:30



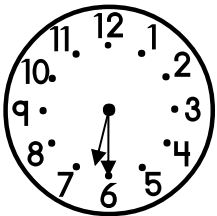
7:30



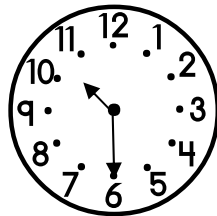
1:30



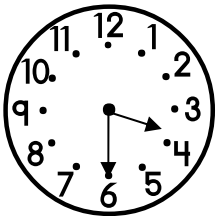
11:30



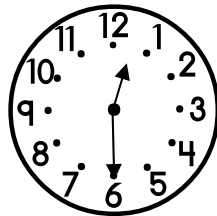
6:30



10:30



3:30



12:30