




Look at each clock and write the time.




1 o'clock




___ o'clock




___ o'clock




___ o'clock




___ o'clock




___ o'clock




___ o'clock



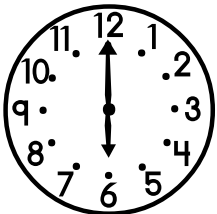
___ o'clock




___ o'clock



___ o'clock




___ o'clock




___ o'clock


Look at each clock and write the time.




1 o'clock




4 o'clock




3 o'clock




7 o'clock




5 o'clock




9 o'clock




8 o'clock



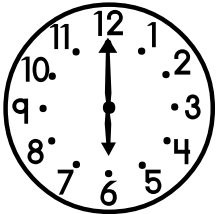
11 o'clock



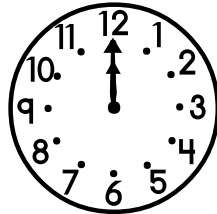
2 o'clock



10 o'clock



6 o'clock



12 o'clock