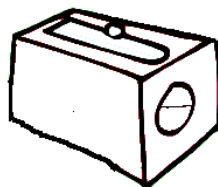





15¢



8¢



12¢



14¢

If you have 16¢ and buy an eraser, how much would you have left?

$$\begin{array}{r} 16\text{¢} \\ -15\text{¢} \\ \hline 1\text{¢} \end{array}$$

---

If you have 9¢ and buy a pencil, how much would you have left?

---

If you have 22¢ and buy the pencil sharpener, how much would you have left?


---

If you have 25¢ and buy a ruler, how much would you have left?

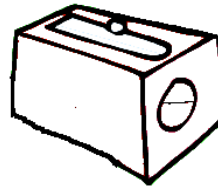
Word Problems Answer Key




15¢



8¢



12¢



14¢

If you have 16¢ and buy an eraser, how much would you have left?

$$\begin{array}{r} 16\text{¢} \\ -15\text{¢} \\ \hline 1\text{¢} \end{array}$$

---

If you have 9¢ and buy a pencil, how much would you have left?

$$\begin{array}{r} 9\text{¢} \\ -8\text{¢} \\ \hline 1\text{¢} \end{array}$$

---

If you have 22¢ and buy the pencil sharpener, how much would you have left?

$$\begin{array}{r} 22\text{¢} \\ -12\text{¢} \\ \hline 10\text{¢} \end{array}$$

---

If you have 25¢ and buy a ruler, how much would you have left?

$$\begin{array}{r} 25\text{¢} \\ -14\text{¢} \\ \hline 11\text{¢} \end{array}$$